

Question 1

Correct



Incorrect



Group

Turned-in



Captain Bubble Head had his pirate crew vote for the crew member that was the strongest.
He made a tally chart of the votes.
How many votes did Stinky get?

| | |
|--------|-----------------|
| Lefty | |
| Stubby | |
| Stinky | |
| Dinky | |

Question 3

Correct



Incorrect



Group

Turned-in



Write a **P** beside the penny.
Write a **Q** beside the quarter.
Write a **D** beside the dime.
Write an **N** beside the nickel.

| | | | |
|--|--|--|--|
| | | | |
| | | | |
| | | | |
| | | | |

Question 2

Correct



Incorrect



Group

Turned-in



Write how much each coin is worth.

| | | | |
|--|---|--|---|
| | = | | ¢ |
| | = | | ¢ |
| | = | | ¢ |
| | = | | ¢ |

Question 4

Correct



Incorrect

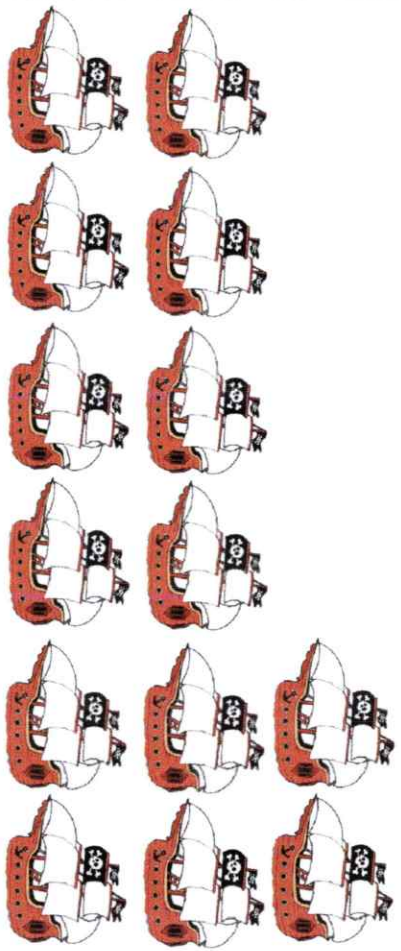


Group

Turned-in



Six of the ships had pet dogs. The rest had pet cats.
How many ships had pet cats?



Question 5



Group



Solve each subtraction problem below.

$$\begin{array}{r} 40 \\ - 30 \\ \hline \end{array} \quad \begin{array}{r} 50 \\ - 30 \\ \hline \end{array} \quad \begin{array}{r} 30 \\ - 10 \\ \hline \end{array} \quad \begin{array}{r} 40 \\ - 20 \\ \hline \end{array}$$

Question 6



Group



Write the letter that comes next in each pattern below.

| | | | | | | |
|-----------|---|---|---|---|---|---|
| | ? | | | | | |
| Pattern 1 | A | B | A | A | B | A |
| Pattern 2 | A | A | B | B | B | A |

Question 7



Group



Write each missing number.

| | | | | |
|---|---|---|---|----|
| 3 | + | ? | = | 7 |
| ? | + | 4 | = | 11 |
| 8 | - | ? | = | 5 |
| ? | - | 3 | = | 6 |

Question 8



Group



Write the words **greater than**, **equal to**, or **less than** to compare each pair of numbers.

14 is _____ 15

19 is _____ 16

7 is _____ 9

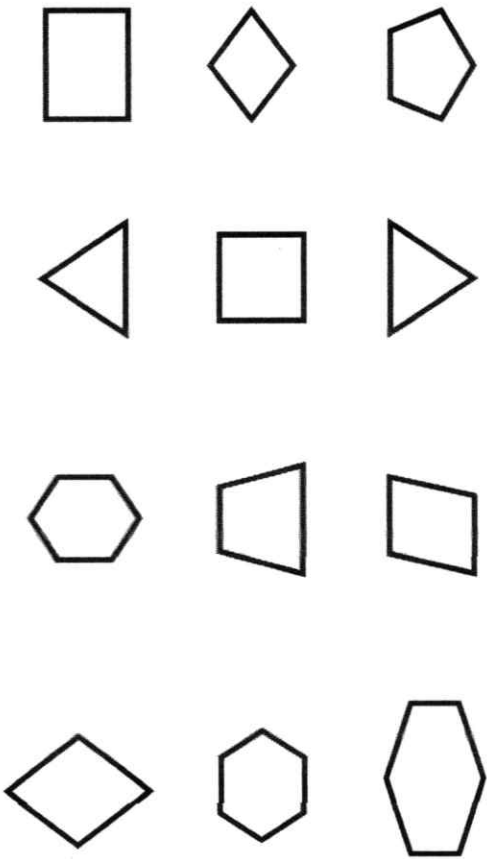
Question 9



Group



Circle each hexagon.



Question 10



Group



Write the number that comes after each pair of numbers.

| | | |
|----|----|--|
| 26 | 27 | |
| 18 | 19 | |
| 9 | 10 | |
| 98 | 99 | |

Question 11




Group



Captain Goofy Legs has 4 pirate ships.

Captain Goofy Lips has 3 pirate ships.

How many pirate ships do they have in all?



Captain Goofy Legs



Captain Goofy Lips

Question 12



Group



Count each captain's ships.

How many more ships does Captain Skinny Legs have than Captain Skinny Arms?

Captain Skinny Legs

Captain Skinny Arms



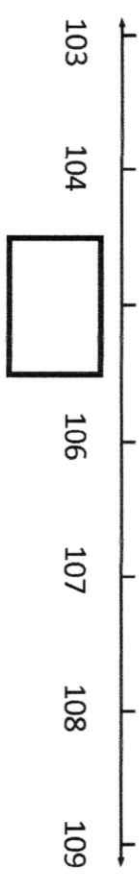
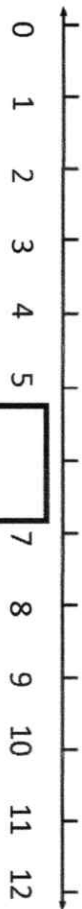
Question 17



Group



Fill in each missing number.



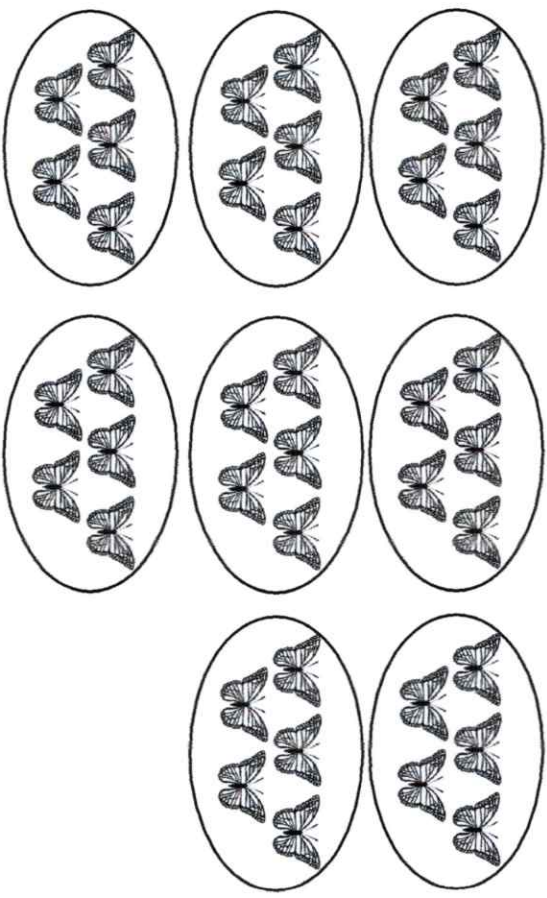
Question 18



Group



How many butterflies are there in all?




Question 19



Group



Count the sharks by 10s. How many sharks are there in all?



Question 20

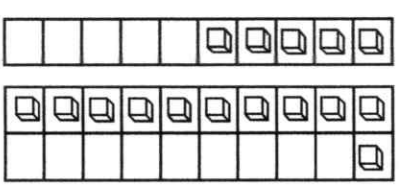
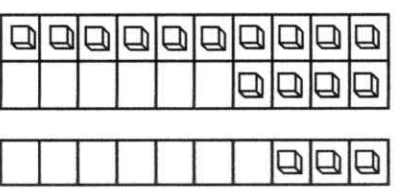
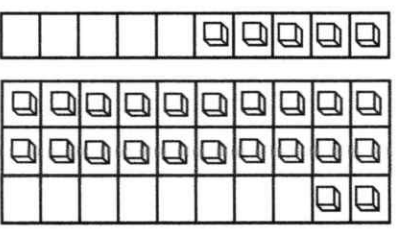


Group



Add.

$$\begin{array}{r} 5 \\ + 22 \\ \hline \end{array} \qquad \begin{array}{r} 14 \\ + 3 \\ \hline \end{array} \qquad \begin{array}{r} 5 \\ + 11 \\ \hline \end{array}$$



Question 21



Group



What number is 10 more than 54?

What number is 10 more than 48?

Question 22



Group



What number is 10 less than 44?

What number is 10 less than 19?

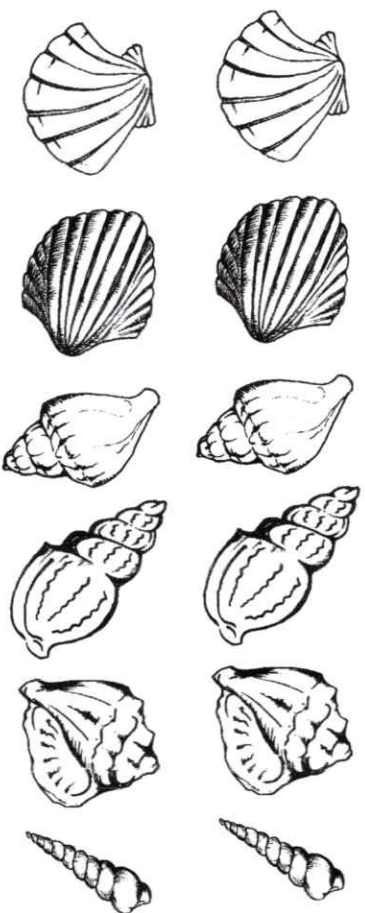
Question 23



Group



Mary has 2 sea shells. Her friend gave her 5 more shells. How many sea shells does she have now?




Question 24



Group



Mike has 2 cats. Bob has 5 cats. How many more cats does Bob have than Mike?




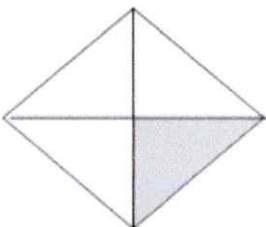
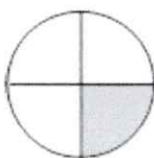
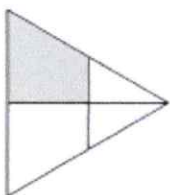
Question 25



Group



Circle each shape that shows fourths.






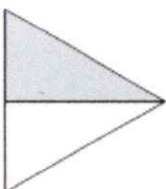
Question 26



Group



Circle each shape that shows halves.




Question 27



Group



Circle the shortest shark.



Question 28



Group



Circle the shortest child.




Question 29



Group



Circle the tallest child pirate.



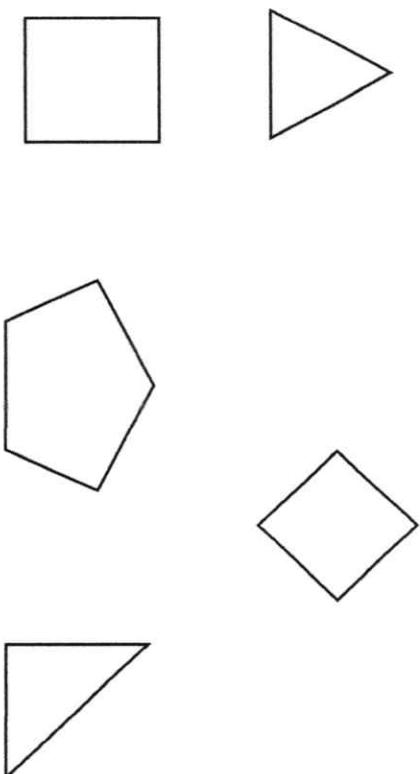
Question 30



Group



Circle each triangle.



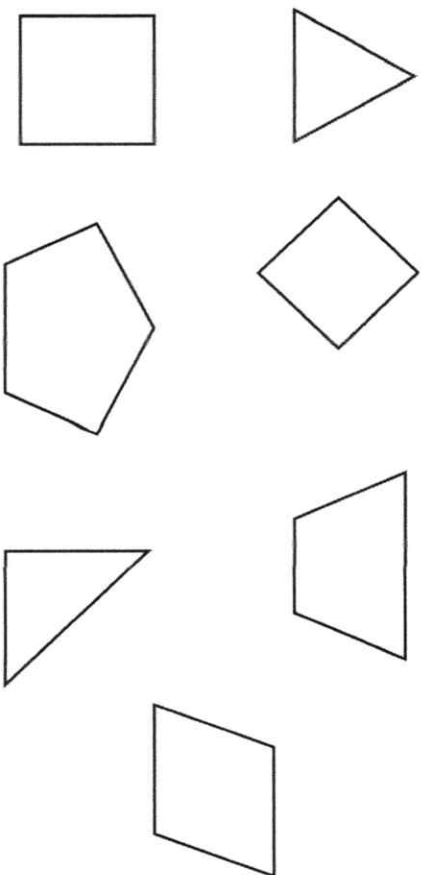
Question 31



Group



Circle each shape that has 4 corners.



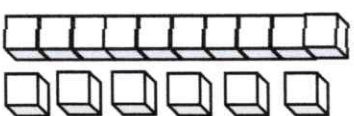
Question 32



Group



What number is shown?



Question 33



Group



Write the missing numbers.

2 Tens + 4 Ones =

Tens + 6 Ones = 16

3 Tens + Ones = 35

Question 34



Group



Write each number.

| | |
|---------|--|
| twenty | |
| eight | |
| fifteen | |


Question 35



Group



There were 5 pirates on the ship. They met 7 more pirates.
How many pirates are there now?




Question 36



Group



8 pirates went swimming. When 3 were eaten by sharks,
the others got out of the water. How many pirates were
not eaten by sharks?




Question 37



Group



Captain Mike has 7 crew members. Captain Sue has 4 crew members. How many fewer crew members does Captain Sue have than Captain Mike?



Question 39



Group



8 pirates were on the ship. More pirates got on the ship that night. Now, there are 14 pirates in all on the ship. How many pirates got on the ship that night?



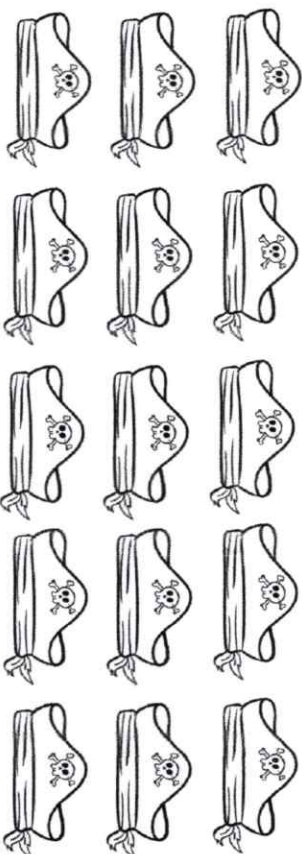
Question 38



Group



There are 9 pirates in all wearing hats. Four are wearing red hats. The rest are wearing black hats. How many pirates are wearing black hats?






Question 40



Group



Add

| | |
|---------------|---|
| $5 + 5 + 3 =$ |  |
| $2 + 2 + 4 =$ |  |
| $6 + 7 + 7 =$ |  |

Question 41

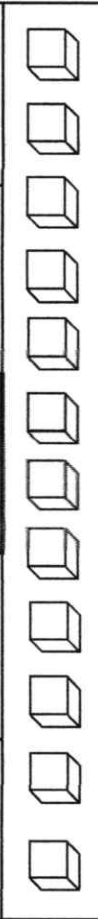


Group

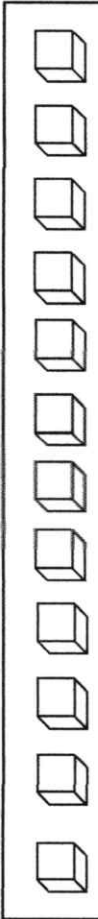


Fill in the missing numbers.

| | | | | |
|--|---|---|---|----|
| | + | 4 | = | 11 |
|--|---|---|---|----|



| | | | | |
|---|---|--|---|----|
| 5 | + | | = | 12 |
|---|---|--|---|----|



Question 42



Group



Each pirate owns 2 hats. How many hats do 6 pirates own?

| Number of Pirates | Number of Hats |
|-------------------|----------------|
| 1 | 2 |
| 2 | 4 |
| 3 | 6 |
| 4 | 8 |
| 5 | 10 |
| 6 | ? |

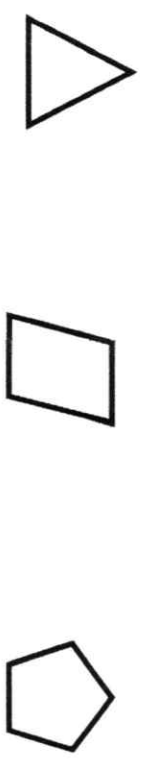
Question 43



Group



Circle each shape that has 4 corners?



Question 44



Group



Write the time shown on each clock.



| | |
|---|---|
| : | : |
|---|---|

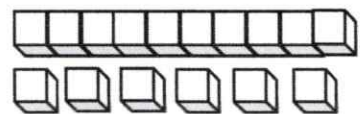
Question 45



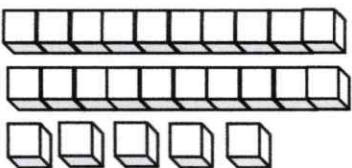
Group



How many cubes are there in all?



+



=

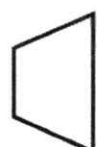
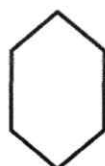
Question 46



Group



Circle each rhombus.



Question 47



Group



Sam, Martha, and Fred went fishing together.

Sam caught 4 fish.

Martha caught 7 fish.

Fred caught 5 fish.

How many fish did they catch in all?

Question 48



Group



The bar graph

shows how many

times each pirate

fell overboard.

How many times

did they fall

overboard

altogether?

Pirates Falling Overboard

