

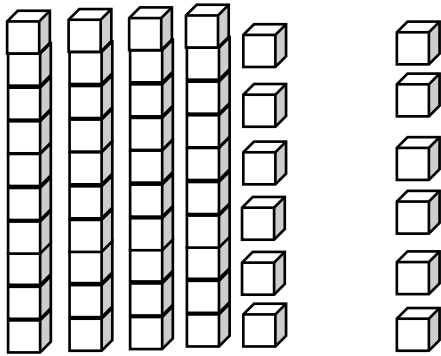
Question 1



Group



How many cubes are there in all?




Question 2



Group



The ships circled below were sunk in battle.
How many ships were **not** sunk?




Question 3



Group



There are 10 pieces of gold in each box. How many pieces of gold are there in all?



Question 4



Group



Write each of the following numbers in standard form.

nine hundred five

fifty-six

three hundred twenty-four

Question 5



Group



Captain Fish had 16 cannons.
Then, he was given the cannons you see below.
How many cannons does he now have?



Question 6



Group



Write the next 3 numbers in each pattern below.
The first one is done for you.

7	8	9 →	10	11	12
73	83	93 →			
106	206	306 →			
124	114	104 →			

Question 7



Group



Captain Skunk gave three crew members some gold coins. The table below shows how many pieces of gold each crew member had.

Complete the table by filling in the empty blanks.

Crew Member	Pieces Started With	Captain Skunk Gave Them	Pieces Of Gold They Now Have
Slimy Hands	5	9	
Runny Nose	8		15
Dirty Feet		12	19

Question 8



Group



Tell what time is shown on each clock.

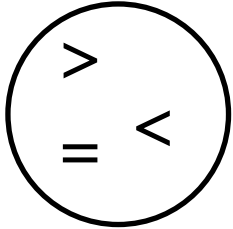


:	:
---	---

Question 9



Group



Use the symbols in the circle to compare the
3 pairs of numbers below.

624

264

799

990

923

498

Question 10



Group



Solve each problem below.

$$23 + 36 + 15 + 18 =$$

$$16 + 36 + 22 + 14 =$$

$$19 + 15 + 21 + 35 =$$

Question 11



Group



Solve each problem below.

$$87 - 23 =$$

$$52 - 34 =$$

$$31 - 17 =$$

Question 12



Group



Captain Green Lips had 46 pieces of gold.
She found 17 more pieces of gold.
How many pieces of gold does she have
now?

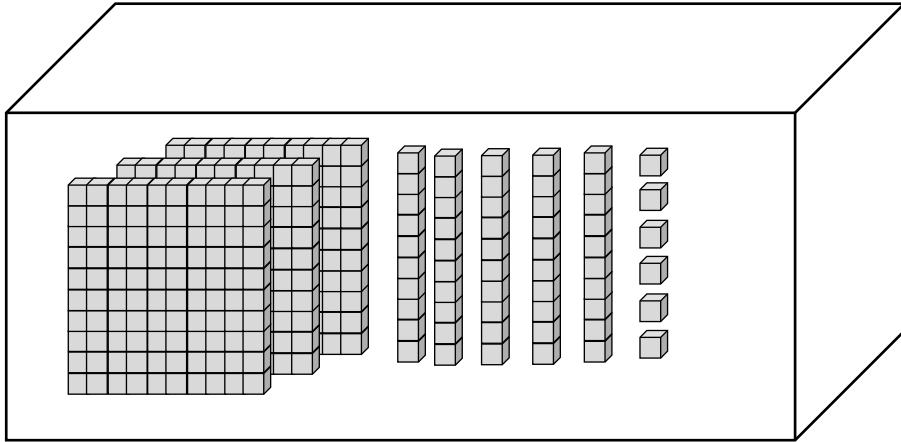
Question 13



Group



What number is shown in the box below?



Question 14



Group



Look at the table below. Fill in the blank space to tell how many cannons in all are on 4 ships?

Number of Ships	Total Number of Cannons	
1 Ship	9	Cannons
2 Ships	18	Cannons
3 Ships	27	Cannons
4 Ships		Cannons

Question 15



Group



Write each number using words.

24	
16	
32	

Question 16



Group



Captain Krump buried 6 treasure chests.

Captain Plump buried 6 treasure chests.

Captain Drump buried 7 treasure chests.

How many treasure chests did they bury in all?

_____ treasure chests

Question 17



Group



Captain Big Foot has 7 more pieces of gold than Captain Runny Nose.

Captain Runny Nose has 8 pieces of gold.

How many pieces of gold does Captain Big Foot have?

Question 18



Group



Captain Hook's ship has 4 cannons.

Captain Red Face's ship has 5 cannons.

Captain Peg Leg's ship has 17 cannons.

How many more cannons does Captain Peg Leg's ship have than the other two ships put together?

_____ cannons

Question 19



Group



Captain Big Hands had 43 pieces of gold.

He lost 19 pieces.

How many pieces of gold does Captain Big Hands have now?

Question 20



Group



Captain Long had the coins shown below in his pocket.

Using the ¢ sign correctly, write how much money he had in all in his pocket.



Question 21



Group



How many pirates in all are shown below?




Question 22




Group




Tell if there is an odd or even numbers of pirates in each rectangle.



☐ Odd
☐ Even



☐ Odd
☐ Even



☐ Odd
☐ Even

Question 23




Group



The table shows how many pieces of gold each pirate had. Place dots in the boxes to make a dot plot that shows how many pieces of gold each pirate had.

Pirate	Pieces of Gold
Barney	3
Spongey	7
Tweety	2
Bunky	4
Barbie	6



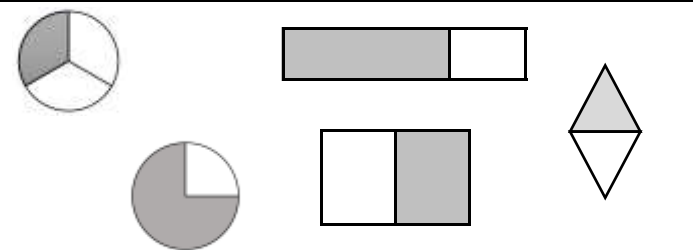
Question 24



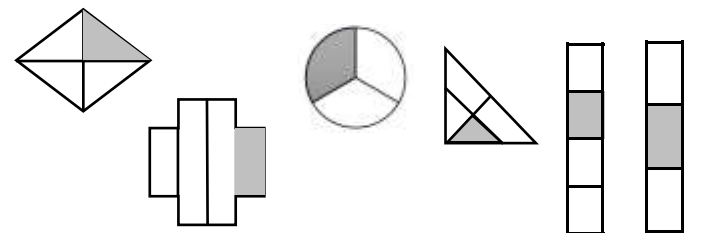
Group



Circle each figure that has 1/2 shaded in.



Circle each figure that has 1/4 shaded in.



Question 25



Group



Fill in the blank spaces to make each statement true.

$$4 + \underline{\quad} = 6 + 3$$

$$5 + 8 = \underline{\quad} + 7$$

$$\underline{\quad} + 2 = 6 + 5$$

$$9 + 4 = 7 + \underline{\quad}$$

Question 26



Group



Captain Blue Nose had 19 pieces of gold in a large treasure chest.

He had 10 fewer pieces of gold in his small treasure chest than in his large treasure chest.

How many pieces of gold does he have in his small treasure chest?

 pieces of gold

Question 27



Group



Captain Blue Nose had 7 special sea shells.

Captain Slip had 6 more special sea shells than Captain Blue Nose.

How many special sea shells did Captain Slip have?

 special sea shells

Question 28



Group



Captain Big Hands had 412 pieces of gold in his treasure chest.

One of his crew members took 118 pieces.

How many pieces of gold does Captain Big Hands have now?

Question 29



Group



Captain Hook's ship had 25 cannons.

Captain Red Face's ship had 32 cannons.

Captain Peg Leg's ship had 16 more cannons than Captain Hook's ship.

How many cannons in all are on the three ships?



Question 30



Group



Captain Big Foot has 5 more crew members than Captain Runny Nose.

Captain Runny Nose has 9 crew members.

How many crew members do they have altogether?

_____ crew members

Question 31



Group



Captain Krump had 27 crew members.

Captain Plump had 30 crew members.

Captain Drump had 12 fewer crew members than Captain Krump.

How many crew members did they have in all?

_____ crew members

Question 32



Group



Captain Green Lips had 197 pieces of gold in her treasure chest.

Later, she put in 82 more pieces of gold.

How many pieces of gold are in her treasure chest now?

_____ pieces of gold

Question 33



Group



Solve each problem.

$98 - 17 =$

$91 - 23 =$

$73 - 26 =$

$88 - 39 =$

Question 34



Group



Solve each problem below.

$93 + 36 + 17 + 10 =$

$58 + 13 + 18 + 13 =$

$77 + 14 + 30 + 43 =$

$80 + 32 + 48 + 15 =$

Question 35




Group



Captain Fish had 19 cannons.

Then, he was given the cannons shown below.

How many cannons does he now have?



Question 36



Group



Captain Bubbles had his pirate crew vote for the crew member that was the strongest.

He made a tally chart of the votes.

How many votes did Stinky get?

Lefty	
Stubby	
Stinky	
Dinky	





Question 37



Group



Tell how many cents each coin is worth.

	=	¢
	=	¢
	=	¢
	=	¢

Question 38



Group



Solve each problem below.

17 - 9	11 - 7	14 - 6	12 - 7

Question 39



Group



Solve each problem below.

18 + 2	18 + 3	20 + 9	18 + 5

Question 40



Group



Captain Wooden Feet had a total of 13 pirate flags on his ship.

Some of the flags were green and some of the flags were blue.

6 of the flags were blue.

How many flags were green?

_____ sails were green

Question 41



Group



Solve each problem below.

60	90	60	80
- 40	- 30	- 10	- 20

Question 42



Group



Write the letter that comes next in each pattern below.

?

Pattern 1	A	B	A	A	B	B	B	A	
Pattern 2	A	A	B	B	B	A	A	A	
Pattern 3	B	A	A	B	B	B	A	A	
Pattern 4	C	D	C	C	D	D	D	C	

Question 43



Group



Solve each problem below.

Solve each problem below.	
$6 + 8 + 8 =$	
$2 + 6 + 6 =$	
$8 + 3 + 2 =$	
$9 + 4 + 7 =$	

Question 44



Group



Fill in the missing numbers to make each statement true.

$$5 + \underline{\quad} = 11$$

$$\underline{\quad} + 5 = 11$$

$$15 - \underline{\quad} = 4$$

$$\underline{\quad} - 9 = 10$$

Question 45



Group



Write the words **greater than**,
equal to, or **less than** to compare each pair of
numbers.

36 is _____ 63

42 is _____ 24

16 is _____ 20

Question 46



Group



Write the 3 numbers that come after each number shown in
Column A. The first one is done for you.

Column A			
25	26	27	28
83			
86			
98			

Question 47



Group



Captain Goofy Legs has 4 pirate ships.
Captain Goofy Lips has 3 pirate ships.
How many pirate ships do they have in all?



Captain Goofy Legs



Captain Goofy Lips

Question 48



Group

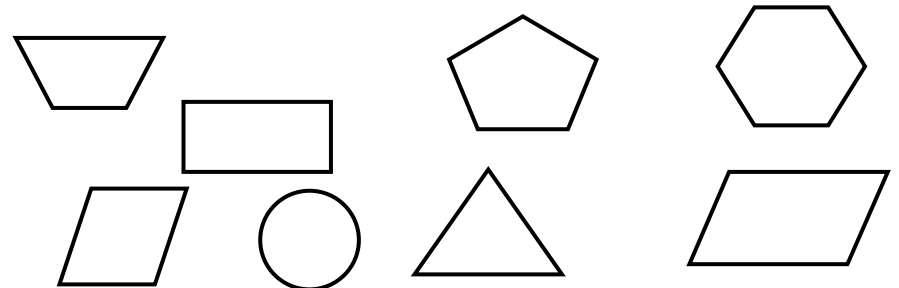


Put a 1 inside the rhombus.

Put a 2 inside the trapezoid.

Put a 3 inside the circle.

Leave the other shapes blank.



Question 49



Group

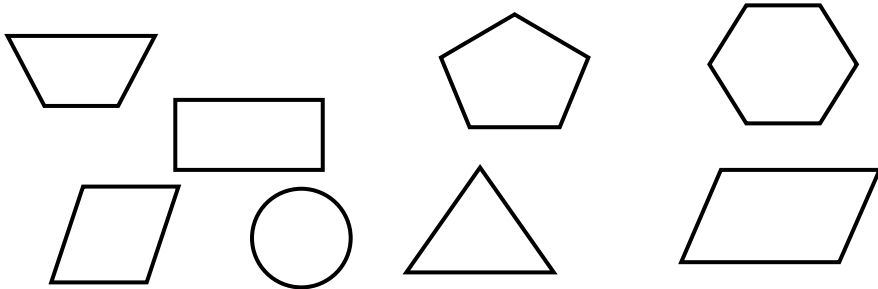


Put a 1 inside the rectangle.

Put a 2 inside the triangle.

Put a 3 inside the hexagon.

Leave the other shapes blank.



Question 50



Group



How many gold coins are there in all?



Question 51



Group



Fill in the blanks.

40	41	42	43	44	45	46	47	48	49		
----	----	----	----	----	----	----	----	----	----	--	--

Question 52



Group



Fill in the blanks below.

Fill in the blanks below.	
9 tens + 4 ones =	
5 tens + 1 ones =	
4 tens + 4 ones =	

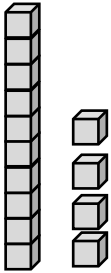
Question 53



Group



What number is shown?



Question 54



Group



Write each number below as whole numbers.

sixteen	
six	
twenty	

Question 55

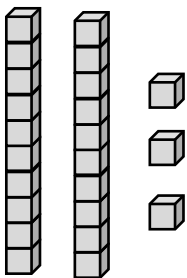


Group



Count the blocks.

Then write the missing numbers on the lines below.



_____ tens + _____ ones = 23

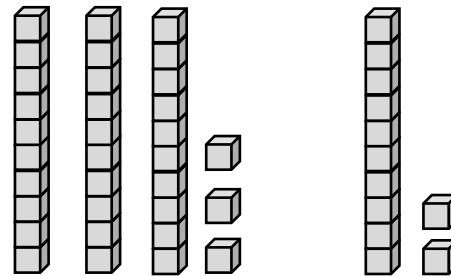
Question 56



Group



How many cubes are there in all?



Question 57



Group



Find each secret number below.

Secret
Number

My secret number is 10 more than 39.

My secret number is 10 less than 49.

My secret number is equal to $13 + 19$.

Question 58



Group



6 pirates wore black hats.

7 pirates wore red hats.

None of the other pirates wore hats.

How many pirates in all wore hats?

Question 59



Group



There were 25 pirates on the ship.

4 pirates wore black hats.

5 pirates wore red hats.

None of the other pirates wore hats.

How many pirates did **not** wear hats?

_____ did not wear hats

Question 60



Group



There were 15 pirates on the beach.

4 of the pirates had swords.

How many pirates **did not** have swords?

_____ did not have swords

Question 61



Group



Fill In The Blanks

$$\underline{\hspace{2cm}} + 6 = 14$$

$$\underline{\hspace{2cm}} + 5 = 10$$

$$\underline{\hspace{2cm}} + 4 = 13$$

Question 62



Group



Fill In The Blanks

$$4 + \underline{\hspace{2cm}} = 10$$

$$3 + \underline{\hspace{2cm}} = 12$$

$$3 + \underline{\hspace{2cm}} = 7$$

Question 63



Group



Fill In The Blanks

$$6 - \underline{\hspace{2cm}} = 2$$

$$16 - \underline{\hspace{2cm}} = 8$$

$$15 - \underline{\hspace{2cm}} = 8$$

Question 64



Group



Fill In The Blanks

$$13 - \underline{\hspace{2cm}} = 5$$

$$18 - \underline{\hspace{2cm}} = 9$$

$$11 - \underline{\hspace{2cm}} = 6$$

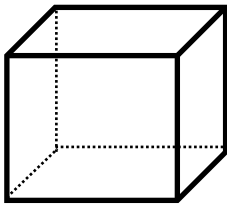
Question 65



Group



How many faces in all does this shape have?



_____ faces

Question 66



Group



Circle the square clock that matches the time on the round clock.



12:00

4:00

12:04

4:12

Question 67



Group



The crew voted for the pirate they liked the best.

Look at the tally chart.

How many more votes did Pirate C get than Pirate A?

_____ more votes

Favorite Pirate		
A		
B		
C		/
D		

Question 68



Group



Tell how many sides each shape below has.

Number of Sides	Shape

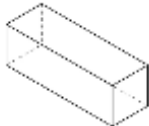

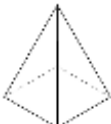
Question 69



Group



Tell how many edges each shape below has.

Number of Sides	Shape
	
	
	

Question 70



Group



Solve each problem.

400	100	700
<u>-89</u>	<u>-35</u>	<u>-26</u>

Question 71



Group



Solve each problem.

3 2 7	4 5 3	5 6 1
+ 3 8	+ 3 6 2	+ 1 7 3
<hr/>	<hr/>	<hr/>

Question 72



Group



Solve each problem.

65	91	99
<u>+41</u>	<u>+77</u>	<u>+17</u>

Question 73



Group



Tippy had 6 golds coins.

He found 4 more coins.

Write an addition sentence that shows how to find out how many coins he has now.

gold coins

Question 74



Group



Skippy had 37 gold coins.

He lost 14 coins.

Write a subtraction sentence that shows how to find out how many coins he has now.

gold coins

Question 75



Group



Fill in the blanks to make each correct.

$$57 + 18 = 57 + \underline{\quad\quad\quad} + 15$$

$$55 + 21 = 55 + \underline{\quad\quad\quad} + 10$$

$$49 + 22 = 49 + \underline{\quad\quad\quad} + 9$$

Question 76



Group



Fill in the blank to make the table correct.

IN	OUT
2	12
10	20
18	
26	36

Question 77



Group



Fill in the blank to make the table correct.

IN	OUT
44	24
37	17
30	10
23	3

Question 78



Group



Find the sums.

35
35
24
+ 24

38
24
35
+ 50

10
38
30
+ 46

Question 79



Group



Find the sums.

36
47
32
30
+ 24

15	8
9	28
32	28
27	38
+ 35	+ 44

Question 80



Group



Captain Hartman paid 62¢ for a new hook for his hand. He paid with a dollar bill. He was given the fewest coins possible as change. How many of each coin was he given?

Number of Coins	Type of Coins
	Quarter
	Dime
	Nickel
	Penny

Question 81



Group



Subtract

801	501	801
- 342	- 242	- 222


Question 82



Group



What is the area of the shape?



	Square units
--	--------------

Question 83



Group

Put a ✓ beside the **better** estimate for each object.

Inches	Feet	Object
		How long a pencil is
		How wide a door is
		How tall the school is
		How wide a book is

Question 84



Group

Put a ✓ beside the **better** estimate for each object.

Centimeters	Meters	Object
		How long a spoon is
		How long a dollar bill is
		How long a car is
		How tall a giraffe is

Question 85



Group



Sophia went for a walk in the park. The graph shows the insects she saw. How many insects did she see in all?



Question 86



Group



Noah went for a walk in the park. The table shows how many of each color of flowers he saw. Create a bar graph to show how many of each color of flowers he saw.

Yellow	4
Red	3
Orange	4



Question 87



Group



Write the missing numbers.

717 = + hundreds + tens + ones

256 = + hundreds + tens + ones

456 = + hundreds + tens + ones

Question 88



Group



Fill in each blank space. Write each answer as whole number.

= 700 + 50 + 3

= 900 + 90 + 6

= 600 + 90 + 3

Question 89



Group



Write each number in digits.

Number	Digits
forty	
thirty-four	
ninety-nine	
eighty-eight	